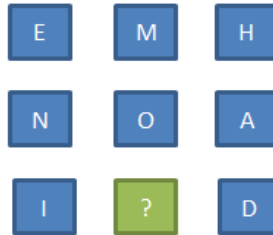
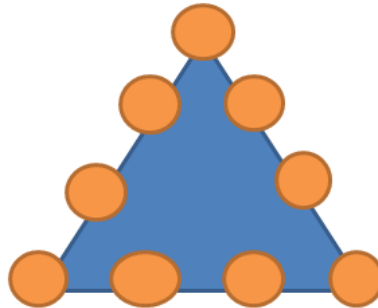


Puzzles

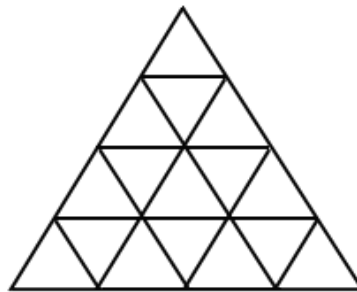
1. Which letter replaces the question mark?



2. Place the numbers 1 through 9 in the circles below, such that each side of the triangle adds up to 17.



3. How many triangles are located in the image below?



4. Using six touching straight lines, connect all of the sixteen circles shown below.



5. If one and a half ducks lay one and a half eggs in one and a half days, how many eggs does one duck lay in one day?
6. Assume 11 is twice 5; how will you write 8 times 5 in the same system of notation?
7. Arrange the following statements logically , using three of them at a time:
- a) Some women are smart.
 - b) Rima is a woman.
 - c) All smart women are good-looking.
 - d) Rima is smart.
 - e) All women are good-looking.
 - f) Rima is good-looking.

A] abf

B] cdf

C] dcb

D] fba